

Grammar  
Assignment

class-VI

Subject - English

⇒ Rearrange the following words into meaningful sentences

1. Ship / violently / the storm / rocked / the
2. Masterpiece / artist / painstakingly / the / his / worked at
3. gift / free / a / Dad / offered / firm / by the / was
4. I read / paper / in the / bungalow / been / caught / had / the / that
5. nightfall / began / cricketers / the / at / their / piercing / calls
6. wore / a hat / he / of coconut / made / fibers / his / on / heard
7. parts / many / coffee / popular / in / world / the / is / very / of

⇒ Rewrite the following sentences, changing the verbs to the present continuous or past continuous tense:-

1. The sun sets in the west.
2. Jagjit polished the furniture.
3. The children laughed and clapped.
4. She sits down and spins the thread.

5. She works in London.

6. Where do they work?

7. Does Jack play football?

8. John plays the violin.

9. water freezes.

10. The cold wind blows.

⇒ Fill in the blanks with the appropriate articles (A, an, the)

1. I borrowed \_\_\_\_\_ pencil from your pile of pencils and pens.

2. Miss Sharma speaks \_\_\_\_\_ Assamese.

3. I like to have \_\_\_\_\_ banana every day.

4. There is \_\_\_\_\_ apple on \_\_\_\_\_ table.

5. I have read \_\_\_\_\_ Ramayana, \_\_\_\_\_ Quran, and \_\_\_\_\_ bible.

6. \_\_\_\_\_ teacher is important person in everyone's life.

7. She has written \_\_\_\_\_ story.

8. \_\_\_\_\_ elephant can drink around 210 liters of water in a day.

2. Write the synonyms of the words that given below. (Write atleast two meanings)

1. Benefit

2. Bold

3. Accident

4. Bad

5. Calm

6. Leave

7. Match

8. Nature

9. Offer

10. Reason

11. Trust

12. Smell

13. Race

14. Guilty

15. Modern

## Writing Assignment

CLASS-VI

ENGLISH

### A. INFORMAL LETTERS

- Q1 - Write a letter to your sister congratulating her on success in the examination. 5
- Q2 - Write a letter to your father requesting him to send you some extra funds for payment of hostel dues. 5

### I FORMAL LETTERS

- Q1 - Write an application to the principal asking for arranging a trip. 5

### B. Picture Composition 5

- C. Write a paragraph on 'Nature' and OR 'My Daily Routine'. 5

### D. Solve Question Paper.

### E. Notice

You are Kiran/Karan, School Captain of Oxford High School, Bahudurgarh. Write a notice informing the students about a poem recitation to be held on 25th September.

## ENGLISH

### 'Literature' Assignment'

Answer the following questions.

1. How did Ratan react when the postmaster was about to leave? Why?
2. What message does the poet give through the poem 'Go not to the Temple'?
3. Describe an incident which shows that Sardar Patel possessed remarkable mental toughness and physical strength from early age?
4. What is the similarity between brightly and richly coloured cloth and the marriage-veil?
5. When and why did Jacques have a change of heart?

### Glossary

1. desperation
2. despite
3. relentless
4. nominated
5. abolishing
6. teased
7. pleading
8. insisted
9. apt
10. buoyed

## Assignment II

1. उचित विराम चिह्न लगाये -

1. तुमने कल कहाँ जाना है
2. हम कल बाजार जाएंगे
3. वह बहुत सदा है

2. सर्वनाम की परिभाषा लिखे।

3. अनेक शब्दों के लिए एक शब्द

1. जिसके माता-पिता घर चुके हैं

2. जो ईश्वर में विश्वास रखता है

3. जो माँस-अंडा खाता है

4. विलोम शब्द - गुण, धर्म, उधार

5. पर्यायवाची लिखें - आँख, माता, पुत्र

6. विशेषण पर गौला लगाये।

1. मेरा घर बड़ा है

2. इजली बहुत खट्टी है

7. कहानी लिखें - एकता में कल

विषय - हिन्दी

Assignment - I

कक्षा - 8<sup>ठी</sup>

1. निम्नलिखित मौखिक प्रश्नों के उत्तर दीजिए।

प्रश्न-1 रेन होल्ड मेसलर कौन थे?

प्रश्न-2 संसार का सर्वोच्च शिखर कौन-सा है?

प्रश्न-3 पुरोहित का क्या नाम था?

2. निम्नलिखित लिखित प्रश्नों के उत्तर दीजिए।

1. शेर बनकर चूहे ने क्या किया?

2. पर्वतारोहण व्यस्तता के लिए किस प्रकार उपयोगी है?

3. बोदा महाशय जब बाजार में पहुँचे, तब बाजार की क्या स्थिति थी?

3. सही उत्तर पर सही का निशान लगाये।

1. माली का क्या नाम था?

सुदास महावीर पुरोहित

2. हमारे यहाँ कौन-सी चाल चली जाती है?

शेर-चाल

हाथी-चाल

शेड-चाल

3. स्वरैस्ट के कितने नाम हैं?

दो

तीन

चार

4. अशुद्ध वाक्यों पर गोलों लगाये।

1. मरीज को दवा दो

2. अस्थिरता यहाँ से बहुत दूर है।

3. रोहन ने सोहन को हमा कर दिया।

Class VI

Assignment I



Pb,

5+10+5=20

ਇਹ ਜਾਂ ਦੋ ਸਤਰਾਂ ਵਿਚ ਉੱਤਰ ਲਿਖੋ

- i. ਸਪੱਸ਼ਟੀ ਪੜ੍ਹਿਆ ਕਹਿਣੀਆਂ ਵਿਚ ਕਿੰਨੇ ਵਾਰ ਜਾਂਦੇ ਹੋ?
- ii ਕਪੜਿਆਂ ਲਈ ਕੌਣ ਜੀ?
- iii ਪੰਜਾਬੀਆਂ ਦੇ ਘੋੜੇ ਵਿਚ ਕੌਣ ਕੌਣਾ ਖਿਲਾ ਹੱਥ ਗਿਣਾ ਹੈ?
- iv 'ਪ੍ਰਤਿਗਿਆ' ਸਵਾਰ ਨਾ ਕੀ ਸਮਝ ਹੁੰਦਾ ਹੈ?
- v ਸਰ੍ਹਦ ਵਿਚ ਜਾਂਦੇ ਕੀ ਕੀ ਕੀਤਾ ਜਾਂਦਾ ਹੈ?

5-6 ਸਤਰਾਂ ਵਿਚ ਉੱਤਰ ਲਿਖੋ

- i ਵੱਡੇ ਨਿਰੀਖਣੀਆਂ ਗੱਲਾਂ ਤੇ ਦੂਰ ਨਿਰੀਖਣ ਕਰਦੇ ਹਨ ਤੇ ਕਿਉਂ?
- ii ਜੇਕਰ ਕੋਈ ਬੱਚਾ ਨੂੰ ਉੱਡਦੇ ਹੋਰ ਕੀ ਹਿੱਸੇ ਤੇ ਬੱਚੇ ਨੂੰ ਕੋਈ ਉੱਡਦੇ ਦਾ ਆਦਿ ਕਿੰਨੇ ਕੀਤਾ?
- iii ਉੱਡ ਕੌਣ ਜੀ? ਉਸਨੇ ਕੀ ਪ੍ਰਤਿਗਿਆ ਕੀਤੀ ਜੀ?
- iv ਪੰਜਾਬੀਆਂ ਦੇ ਘੋੜ-ਪੰਛ, ਪ੍ਰਾਣੀਆਂ ਦੀਆਂ ਆਦਿ ਘੋੜੇ ਵਿਸਥਾਰ ਵਿਚ ਲਿਖੋ?
- v 'ਪ੍ਰਤਿਗਿਆ' ਕਹਾਣੀ ਤੇ ਕੀ ਨਿਰੀਖਣੀਆਂ ਕੀਤੀ ਹੈ?

ਦੂਰ ਬੱਚੇ

ਠਾਣ ਕੰਠ

ਦੁਆਰੇ ਪਗੜੇ ਵੇਖੋ

ਸਪੱਸ਼ਟ

ਸਪੱਸ਼ਟ ਰਾਹ

ਸਪੱਸ਼ਟ



1. ਲੇਖ — ਕੋਈ ਇੱਕ ਲੇਖ ਕਰੋ :—

(6)

ਦੀਵਾਲੀ, ਮੇਰਾ ਸਕੂਲ, ਮੇਰਾ ਸਨੜਾਉਂਦਾ ਅਧਿਆਪਕ

2. ਪੱਤਰ — ਮਿੱਠਾ ਨੂੰ ਪਸੰਦ ਭੇਜੋ ਤੇ ਦੁਆਈ-ਪੱਤਰ ਲਿਖੋ।

(5)

ਬਿਨਾਮੀ ਦੀ ਕੁੱਟੀ ਲੈਣ ਲਈ ਆਰਜ਼ੀ ਲਿਖੋ।

3. ਕਹਾਣੀ — ਕੋਈ ਇੱਕ ਕਹਾਣੀ ਕਰੋ :—

(5)

ਦੂਰ ਤੇ ਬਿੱਲੀ ਜਾਂ ਹੋਰੀ ਬਾਗ਼ਾਂ ਸਿੰਗ

4. 1-2 ਸਤਰਾਂ ਵਾਲੇ ਪੁਸ਼ਤਾਂ ਦੇ ਉੱਤਰ ਦਿਓ :—

(3)

1. ਪੰਜਾਬੀਆਂ ਦੀ ਸਨ-ਭਾਉਂਦੀ ਖੁਸ਼ੀ ਕਿਹੜੀ ਹੈ।

2. ਸਾਇੰਸਦਾਨਾਂ ਨੇ ਕੀ-ਕੀ ਬਣਾਇਆ ਹੈ ?

3. ਬਲਤੋਲ ਤੇ ਉਮਰੀ ਵੀਰੀ ਨੇ ਯਾਰ ਕਿਏ-ਕਿਏ

ਸਜਾਇਆ ?

5. ਬਹੁ-ਵਿਕਲਪੀ-ਚੁਣੋ ਤੇ ਲਿਖੋ :—

(3)

1. ਪੰਜਾਬੀਆਂ ਦੀ ਰਲੇਰੀ ਦਾ ਕੀ ਰਾਜ ਹੈ ?

ਜੜਾਈਆਂ  ਖੰਡਾ ਖਾਣ-ਖੀਣ  ਬੇਗ ਖਾਣ-ਖੀਣ

2. ਰਸਪਨਾ ਚਾਣਕਾ ਕਿਸ ਤੇ ਬੈਠ ਕੇ ਚੰਨ ਤੇ ਗਈ ?

ਗਬਟ ਤੇ  ਸਾਇਕਲ ਤੇ  ਹੱਲੀਖਾਣ ਤੇ

3. ਬਲਤੋਲ ਦੇ ਤੋਸਤ ਸੇਨੂੰ ਨੂੰ ਕੀ ਕਰਨ ਦਾ ਸੋਚ ਸੀ ?

ਖਾਣ-ਖੀਣ ਦਾ  ਕਿਤਾਬਾਂ ਪੜ੍ਹਨ ਦਾ  ਖੇਡਣ ਦਾ

6. 4-5 ਸਤਰਾਂ ਵਾਲੇ ਪੁਸ਼ਤਾਂ ਦੇ ਉੱਤਰ ਦਿਓ :—

(3)

1. ਪਹਿਲਾਂ ਫਿਰਮਾ-ਸਾਈਆਂ ਕਿਹੜੇ ਜਿਹੀਆਂ ਹੁੰਦੀਆਂ ਸਨ ?

2. ਸੇਨੂੰ ਚੰਨ ਸੀ, ਉਹ ਕਿਹੜੇ ਜਿਹੀਆਂ ਪੁਸ਼ਤਾਂ ਪੜ੍ਹਦਾ ਸੀ ?

3. ਸੋਚ ਕਰੋ ਦੇ ਬੰਦੇ ਕੀ-ਕੀ ਕਰਨਾ ਪਸੰਦ ਕਰਦੇ ਹਨ ?

7. ਵਾਰ / ਮੁਹਾਵਰੇ :— ਕੋਈ ਤਿੰਨ ਕਰੋ

(3)

ਜਾਇਕੇਦਾਰ, ਸਾਠੇ ਭਗਤ ਕਰੀ, ਗਾਠ, ਤੋਹਫਾ,

ਸੋਧਾਂ ਸੀਟ ਜਾਣਾ

8. ਪੜ੍ਹਨਾਂਦ — ਪੜ੍ਹਨਾਂਦ ਦੀ ਪ੍ਰੀਤਸਾ ਉਦਾਹਰਣ ਸਹਿਤ

ਲਿਖੋ ਅਤੇ ਉਸ ਦੀਆਂ ਕਿਸਮਾਂ ਦੇ ਨਾਮ ਲਿਖੋ।

(3)

9. ਦਿੱਤੇ ਸ਼ਬਦ :—

(2)

ਮਾਮਤਕ, ਸੱਚੇ

10. ਸਿੰਗ ਬਣਾਓ :—

(2)

1. ਖੋਲ੍ਹਾ ਤੇ ਬੇਗ ਭਾਰ ਦੋਸਾ ਕਰੋ ਹਨ।

2. ਬੰਦੇ ਨੇ ਸੱਚ ਨੂੰ ਤੋਗ ਸਾਰਿਆ।

11. ਦੁਰਲੱਭ ਬਦਲੇ:—

1. ਉਹ ਪੁਸਤਕ ਪੜ੍ਹ ਰਿਹਾ ਹੈ।
2. ਉੱਥੇ ਇੱਕ ਚਾਕਲੇਟ ਹੈ।

(2)

12. ਬਹੁਤੇ ਸ਼ਬਦਾਂ ਦੀ ਥਾਂ ਇੱਕ ਸ਼ਬਦ ਲਿਖੋ।

1. ਭਾਰਤ ਦੇ ਰਹਿਣ ਵਾਲਾ।
2. ਜਿਸ ਨੂੰ ਸ਼ਰਾਬ ਪੀਣ ਦੀ ਆਦਤ ਪੈ ਜਾਵੇ।

(2)

Each question carry one mark (11)

1. which one is a mixture fibre?

(a) Terrycot (b) Cotton (c) Silk (d) Wool

2. which of the following protect the embryo?

(a) Seed (b) Seedcoat (c) cotyledon (d) fruit

3. we are able to produce image due to

(a) Reflection (b) Shadow (c) Refraction (d) Dispersion

4. What causes floods?

(a) Heavy rain (b) No rain (c) heavy wind (d) Fire

5. \_\_\_\_\_ is an animal fibre.

6. Light is a form of \_\_\_\_\_.

7. The \_\_\_\_\_ state of water is ice.

8. Match-1. Shadow      air and water

2. Transparent      dark

butter paper

9. Water exists in three states(T/F)

10. There is no shortage of drinking water during flood(T/F)

Each question carry 2 marks (10)

1. Why do we wear clothes?

2. Name two plants have reticulate venation

3. Name the substance shown in figure how its changes?
4. Mention two factors on which size of shadow depends?
5. Name two opaque and transparent materials

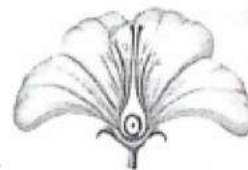


Each question carry 3 marks (9)

1. How are fibres classified? Give two examples of each.
2. What are fibrous roots? Draw its diag.
3. State a difference between shadow and image.

Each question carry 5 marks (10)

1. What are the different methods to conserve water?



2. label the following diagram and describe its structure.

**Assignment of science**

**Class 6**

Q 1 What is garbage?

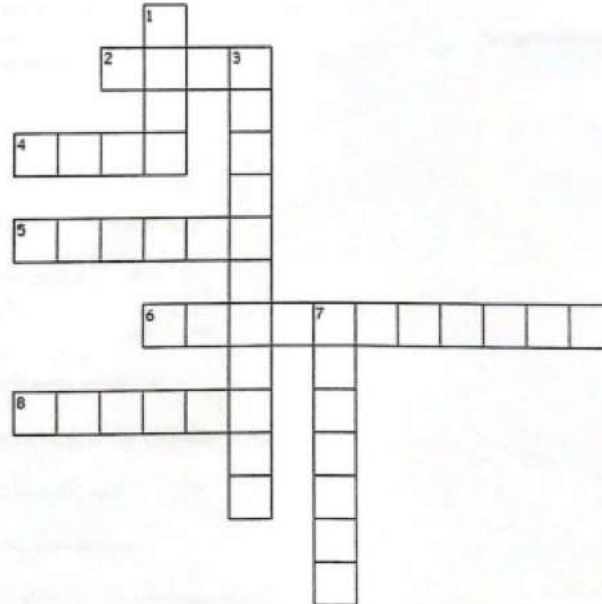
Q 2 What are the sources of waste?

Q 3 What type of garbage is collected in green bins?

Q4 Find the Jumbled word

- a. LLEOSBU
- b. LSEURT
- c. PRENNTARAST
- d. OHRUG
- e. GAVNIER
- f. TCASLPI

**Q5 Puzzle**



Across

2. cotton is a \_\_\_\_ materials

4. The materials which are difficult to compress are known as \_\_\_\_\_

5. Iron, copper, aluminium is called \_\_\_\_\_

6. The materials through which objects can be seen, but not clearly, are known as \_\_\_\_\_

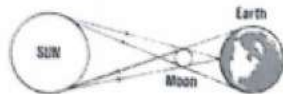
8. shiny appearance is termed as \_\_\_\_\_

Down

1. Opaque material which we got from trees

3. water is a \_\_\_\_\_ liquid

7. vinegar is \_\_\_\_\_ in water



Q6.

(a) Label the diagram.

(b) Name the Eclipses shown in figure.

(c) Explain the diagram.


Write 55:65 in lowest term

Are 12, 15, 18 and 10 in proportion

3. Find the area of rectangle whose sides are 13m and 20m.

4. Find the perimeter of square =  $4x$  \_\_\_\_\_

5. Name of the solids



6. Fill it.

	No. of faces.	No. of vertices.	No. of edges.
Cube			
Cone			
Cuboid			

7. Is 4cm, 4cm and 8cm is measure of triangle? (6)

8. Fill in blanks  $4:12 :: 12:60$ .

9. Let  $\overline{PQ}$  be perpendicular to the line segment  $\overline{XY}$ . Let  $\overline{PQ}$  and  $\overline{XY}$  intersect at point A. What is the measure of  $\angle PAQ$ .

10. Find the value of  $x$  so that 12:15 and  $x:45$

11. If cost of 7m cloth is Rs 294. Find the cost of 5m of cloth? (10)

12. A cricket team played 18 games and won 6 games. What is the ratio of the number of games won to the number of games played?

13. The sum of two angles is  $90^\circ$ . The ratio of angles is 2:4:5. Find the length of each side of triangle

14. Fill up:-

(i) All sides of square \_\_\_\_\_

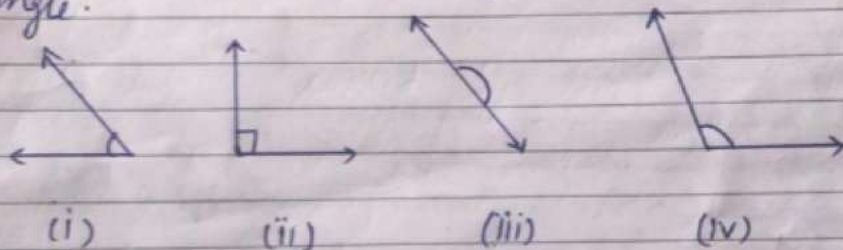
(ii) A glass tumbler is shaped like which solid. \_\_\_\_\_

(iii) Measure of each angle of rectangle is of \_\_\_\_\_ degrees

15. Sehwag made 48 runs in 6 over's and Sachin made 98 runs in 14 over's. who made more runs per over.

16. A square field has side of length 800m. Find the cost of fencing the field with three rounds of wire (13)

1. Compare 3:5 and 7:9
2. (i) A circle is a polygon. Is it true?
- 2 (ii) How many diagonals does a triangle have?
3. (i) Find area of ~~the~~ rectangle whose sides are 8 cm and 12 cm.  
(ii) Find area of square whose sides are 10 cm.
4. Draw a circle of radius 4.2 cm and draw any two chords. Construct the perpendicular bisect of these chords, where they meet.
5. Use the protractor to find the measure of each angle.



6. Find the value of  $x$  so that  $4x-2:2::2x+2:4$  (5 \times 2 = 10)
7. Construct angles of (i)  $90^\circ$  (ii)  $60^\circ$  and write their names. (3 \times 2 = 6)
8. A cyclist takes 7 rounds of a rectangular field whose dimensions are 220 m x 150 m. Find the total distance covered by him? (4 \times 1 = 4)



if the wire costs Rs 135 per metre?

17. A hall way is 8m long and 10cm wide:-

(i) Find the area of hall way in  $\text{cm}^2$ .

(ii) Carpet costs Rs 4 per sq. cm, how much will it cost to carpet the hall way?

18. Tom runs around a square park of side 15m three times. Bob runs twice around a rectangular park with length 100m and breadth 60m. Who covers more distance and by how much?

(12)

**Shri Guru Harkrishan Public School**  
**IIInd assignment based on chapter 20 and 21**  
**Geography**

- Q1. Write the different types of Landforms .
- Q2. Write a short note on Sunderban delta .
- Q3. Give any two important features of Plateau .
- Q4. Give few examples of Block Mountains .
- Q5. Name the oldest Fold mountains in the world .
- Q6. Write two island groups found in india .
- Q7. Define Mountains . Explain different types of mountains .
- Q8. Discuss the importance of different landforms in human life .

**Shri Guru Harkrishan Public School**  
**1st assignment based on chapter 9 and 10**

**History**

- Q1. Write a short note on PushyamitraSunga .
- Q2. Who were the first and the last rulers of the Sunga dynasty ?
- Q3. Who wrote the BudhhaCharita ?
- Q4. Why Gandhara School of art was called so ?

**Civics**

- Q5. Difference between the State Government and Panchayati Raj ?
- Q6. Draw a chart to show the three tier system of the Panchayati Raj .
- Q7. Find out the number of districts and blocks in four states in our country .
- Q8. Define the Following terms  
Hinayana Sect . and Mahayana Sect .

Sri Guru Harkrishan Public School

Subject:- SST

Class -VI

MM-40

HISTORY

MM-13

Tick the Correct answer

(3m)

- 1) The capital of the Pandya Kingdom was at  
a) Madurai ( )    b) Pava ( )    c) Anga ( )    d) Ujjain ( )
- 2) The Pandayans kingdom was famous for  
a) Silk ( )    b) Pottery ( )    c) Spices ( )    d) Pearls ( )
- 3) He was known as the lord of South  
a) Simrika ( )    b) Elara ( )    c) Karikata ( )    d) Sita Karni ( )

Match the following columns

(3m)

- |                  |                                   |
|------------------|-----------------------------------|
| 1. Madurai       | (a) A seaport                     |
| 2. Chaitya Caves | (b) capital of the Pandya Kingdom |
| 3. Arikamedo     | (c) Near Pune                     |

SHORT ANSWER TYPE QUESTIONS

(3m)

- Q1. Name two important kings of Chola dynasty?
- Q2. How many poems were composed during the last Sangam Assembly ?
- Q3. Who was Pushyamitra Sunga?

Answer the Following Questions in Detail

(4m)

- Q1. Briefly discuss the Satavahana administration.

GEOGRAPHY

MM-14

Tick the correct option

(3m)

1. Mt. Fujiyama is an example of  
a) Block Mountain ( )    b) Fold Mountain ( )    c) Volcanic Mountain ( )    d) None of the above ( )
2. The Himalayas are formed due to  
a) Folding ( )    b) Faulting ( )    c) Cracks ( )    d) Accumulation of soils ( )
3. India lies in the continent of  
a) Africa ( )    b) Asia ( )    c) Australia ( )    d) Europe ( )

FILL IN THE BLANKS

(3m)

1. The Plateaus are also called \_\_\_\_\_
2. Alps are the \_\_\_\_\_
3. The Lakshadweep island are of \_\_\_\_\_ origin

**SHORT ANSWER TYPE QUESTIONS**

(4m)

- Q1. Mention the forms of mountains .  
Q2. Name the old fold mountains located in Australia .  
Q3. Name the two major rivers which fall into the Arabian sea .  
Q4. Give the locations of the Malwa Plateau .

**LONG ANSWER TYPE QUESTIONS**

(4m)

- Q1. Differentiate between Mountains and Plateau.

**CIVICS**

MM-13

**TICK THE CORRECT OPTION**

(3m)

1. The structure of Panchayati Raj  
a) Three -tier system ( ) b) Two -tier system ( ) c) Five -tier system ( )
2. The Chairman is the head of  
a) Gram Sabha ( ) b) Municipality ( ) c) Zila Parishad ( )
3. Public health is the \_\_\_\_\_ function of the municipality  
a) essential ( ) b) voluntary ( ) c) both ( )

**Fill in the blanks**

(3m)

1. The panchayati raj is a system of local government in the \_\_\_\_\_ areas.  
2. The chairman is the head of a \_\_\_\_\_  
3. The elected head of the municipal corporation is the \_\_\_\_\_

**Short answer type questions**

(4m)

1. How is municipality formed ?  
2. What are the two functions of zila Parishad ?

**Long answer type questions**

(3m)

1. What is a nagar panchayat ? Describe its functions .

Class – VI

Subject – Computer

Assignment – 1

- I. Answer the following questions: - 2x8=16
1. Personal Computer?
  2. Desktop Computer?
  3. Laptop Computer (Notebook)?
  4. Palmtop Computer?
  5. Micro Computer?
  6. Mini Computer?
  7. Mainframe Computer?
  8. Super Computer?
- II. Write full forms of the following: - 1x4=4
1. CD
  2. DVD
  3. USB
  4. AI

Class – VI

Subject – Computer

Assignment – 2

- I. Explain the followings: - 2x8=16
1. Hardware?
  2. Software?
  3. Program?
  4. System Software?
  5. Application Programs?
  6. Utility Programs?
  7. Operating System?
  8. Firmware?
- III. Write short-cut commands of the following: - 1x4=4
- Bold
- Cut
- Underline
- Paste